

Safety Practice and Hand Tools

1). What is the name of the tool as shown in the figure?



- (A) Claw hammer
- (B) Tack hammer
- (C) Cross pein hammer
- (D) Ball pein hammer

Correct Answer : D User

2). What is the name of the part marked 'X' as shown in the figure?



- (A) Edge
- (B) Heel
- (C) Tang
- (D) Point

Correct Answer : B User

3). What is the name of the file as shown in the figure?



- (A) Rasp cut file
- (B) Single cut file
- (C) Double cut file
- (D) Curved cut file

Correct Answer : A

4). What is the name of the tool as shown in the figure?



- (A) Wire stripper
- (B) Side cutter
- (C) Pincer
- (D) Gimlet

Correct Answer : C

5). Which condition of the victim is referred as COMA stage?

- (A) Unconscious but can respond to calls
- (B) Conscious but cannot respond to calls
- (C) Breathing and respond to calls
- (D) Lie totally senseless and do not respond to calls

Correct Answer : D

6). Which is the waste disposal method that produces the heat?

- (A) Landfill
- (B) Composting
- (C) Incineration
- (D) Waste compaction

Correct Answer : C

7). Which file is used for sharpening the blunt teeth of a tenon saw?

- (A) Square file
- (B) Round file
- (C) Triangular file
- (D) Half round file

Correct Answer : C User

- 8). What is the use of the pincer?
(A) Twisting the flexible wires
(B) Cutting larger diameter of wires
(C) Extracting the pin nails from the wood
(D) Holding small objects, where finger cannot reach

Correct Answer : C

- 9). What immediate action should be taken to rescue the victim, if he is still in contact with the electrical power supply?

- (A) Pull or push him from the contact by hand
(B) Inform your authority about this electric shock
(C) Call someone for helping to remove him from contact
(D) Break the contact by switching OFF the power supply

Correct Answer : D

- 10). Which is the physical hazard?

- (A) Smoking
(B) Vibration
(C) Corrosive
(D) Bacteria

Correct Answer : B

- 11). Which is the golden hour for the victim injured on head with risk of dying?

- (A) First 15 minutes
(B) First 30 minutes
(C) First 45 minutes
(D) First 60 minutes

Correct Answer : B

- 12). What is the back ground colour of the warning signs in the safety sign category?

- (A) Blue
(B) White
(C) Yellow
(D) Green

Correct Answer : C

- 13). Which criteria must be satisfied for the quality of PPE 's?

- (A) It should with stand the hazards
(B) It cannot be used for long period
(C) Made by non standard material
(D) Low cost

Correct Answer : A

- 14). Which Personal Protective Equipment (PPE) is used for the protection from fumes?

- (A) Apron
(B) Goggles
(C) Ear muff
(D) Respirator

Correct Answer : D

- 15). Which step of the 5s-concept refers "Standardization"?

- (A) Step - 1
(B) Step - 2
(C) Step - 3
(D) Step - 4

Correct Answer : D

- 16). Which artificial respiration method is to be performed to the victim with injuries on the chest and belly?

- (A) Schafer's method
(B) Mouth to mouth method
(C) Holger - Nelson's back pressure method
(D) Nelson's arm-lift back pressure method

Correct Answer : B

- 17). Which is the correct sequence of operation to be performed while using the fire extinguisher?

- (A) Pull, Aim, Squeeze, Sweep
(B) Pull, Aim, Sweep, Squeeze
(C) Push, Arrange, Squeeze, Sweep
(D) Push, Arrange, Sweep, Sequence

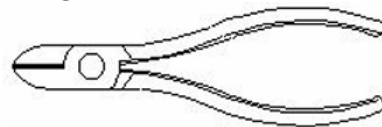
Correct Answer : A

- 18). What is starving in extinguishing of fire?

- (A) Adding fuel to the fire
(B) Using water to cool the fire
(C) Removing fuel element from the fire
(D) Preventing oxygen supply to the fire

Correct Answer : C


- 19). What is the name of the tool as shown in the figure?



- (A) Nose pliers
(B) Crimping tool
(C) Combination pliers
(D) Diagonal cutting pliers

Correct Answer : D

20). What is the name of the safety sign as shown in the figure?



- (A) Warning sign
- (B) Mandatory sign
- (C) Prohibition sign
- (D) Information sign

Correct Answer : D

21). Which disposal method of waste save lot of energy?

- (A) Land fill
- (B) Recycling
- (C) Incineration
- (D) Composting


Correct Answer : B

22). Which type of fire extinguisher is used for fire on electrical equipment?

- (A) Halon type
- (B) Foam type
- (C) Gas cartridge water type
- (D) Stored pressure water type

Correct Answer : A

23). What is the name of the hammer as shown in the figure?



- (A) Claw hammer
- (B) Ball pein hammer
- (C) Cross pein hammer
- (D) Straight pein hammer

Correct Answer : A

24). What is the name of the drill bit as shown in the figure?



- (A) Flat drill bit
- (B) Taper shank bit
- (C) Countersink bit
- (D) Straight shank bit

Correct Answer : B

25). What is smothering in extinguishing of fire?

- (A) Adding the fuel element to the fire
- (B) Removing the fuel element from the fire
- (C) Using of water to lower the temperature
- (D) Isolating the fire from the supply of oxygen

Correct Answer : D

